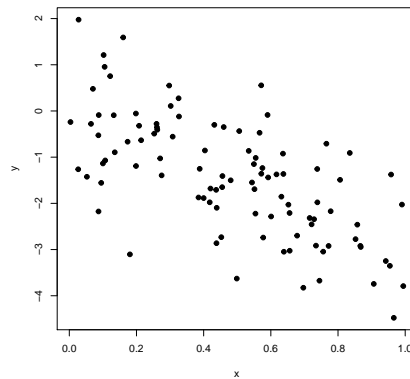


1. For each of the pairs of variables below, circle the response variable.

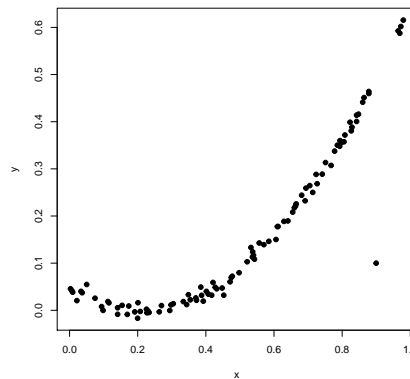
age	height
home selling price	number of bathrooms
cereal box capacity	cereal box cost
growing degree days	corn maturity date
amount of sales	amount of advertising
interest rate	amount of home sales
amount of home sales	home sale price
salary	years of experience
age	salary

2. For each of the plots below, determine the form, direction, and strength. Also, circle any outliers. Finally, guess the sample correlation.

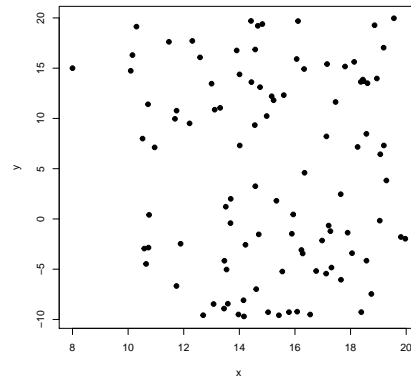
(a) Dataset 1



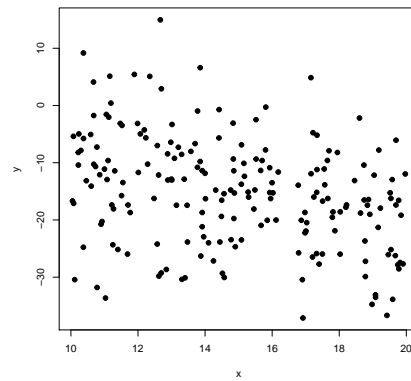
(b) Dataset 2



(c) Dataset 3



(d) Dataset 4



(e) Dataset 5

